

**Grade 2**

**(going into Grade 3)**

**Summer Math Packet**

## Addition Worksheet 2

1 a.  $4 + \underline{\quad} = 13$

1 b.  $\underline{\quad} + 13 = 17$

2 a.  $\underline{\quad} + 8 = 14$

2 b.  $3 + \underline{\quad} = 18$

3 a.  $\underline{\quad} + 10 = 18$

3 b.  $\underline{\quad} + 6 = 20$

4 a.  $\underline{\quad} + 2 = 10$

4 b.  $\underline{\quad} + 9 = 19$

5 a.  $\underline{\quad} + 1 = 9$

5 b.  $\underline{\quad} + 2 = 16$

6 a.  $7 + \underline{\quad} = 9$

6 b.  $16 + \underline{\quad} = 18$

7 a.  $\underline{\quad} + 2 = 19$

7 b.  $6 + \underline{\quad} = 15$

8 a.  $4 + \underline{\quad} = 6$

8 b.  $18 + \underline{\quad} = 19$

### Answer Key

© 2003-2009 Homeschool Math Worksheets  
<http://www.homeschoolmath.net/worksheets>

## Math Worksheet 3: Subtraction

1 a.  $\underline{\quad} - 0 = 0$

1 b.  $4 - \underline{\quad} = 1$

2 a.  $\underline{\quad} - 7 = 1$

2 b.  $1 - \underline{\quad} = 1$

3 a.  $\underline{\quad} - 4 = 0$

3 b.  $\underline{\quad} - 3 = 0$

4 a.  $\underline{\quad} - 0 = 6$

4 b.  $\underline{\quad} - 2 = 0$

5 a.  $8 - \underline{\quad} = 7$

5 b.  $\underline{\quad} - 8 = 1$

6 a.  $\underline{\quad} - 7 = 2$

6 b.  $\underline{\quad} - 4 = 4$

7 a.  $\underline{\quad} - 5 = 0$

7 b.  $2 - \underline{\quad} = 1$

8 a.  $9 - \underline{\quad} = 2$

8 b.  $\underline{\quad} - 0 = 7$

9 a.  $\underline{\quad} - 4 = 1$



9 b.  $6 - \underline{\quad} = 0$

10 a.  $\underline{\quad} - 3 = 2$

10 b.  $7 - \underline{\quad} = 5$

Answer Key

© 2003-2009 HomeschoolMath.net Worksheets



$$\begin{array}{r} 11 \\ - 6 \\ \hline 5 \end{array}$$

Subtract.

$$\begin{array}{r} 10 \\ - 6 \\ \hline \end{array}$$

$$\begin{array}{r} 12 \\ - 4 \\ \hline \end{array}$$

$$\begin{array}{r} 11 \\ - 5 \\ \hline \end{array}$$

$$\begin{array}{r} 12 \\ - 6 \\ \hline \end{array}$$

$$\begin{array}{r} 11 \\ - 7 \\ \hline \end{array}$$

$$\begin{array}{r} 9 \\ - 6 \\ \hline \end{array}$$

$$\begin{array}{r} 10 \\ - 9 \\ \hline \end{array}$$

$$\begin{array}{r} 12 \\ - 8 \\ \hline \end{array}$$

$$\begin{array}{r} 10 \\ - 8 \\ \hline \end{array}$$

$$\begin{array}{r} 8 \\ - 2 \\ \hline \end{array}$$

$$\begin{array}{r} 11 \\ - 3 \\ \hline \end{array}$$

$$\begin{array}{r} 10 \\ - 2 \\ \hline \end{array}$$

$$\begin{array}{r} 8 \\ - 5 \\ \hline \end{array}$$

$$\begin{array}{r} 10 \\ - 4 \\ \hline \end{array}$$

$$\begin{array}{r} 9 \\ - 4 \\ \hline \end{array}$$

$$\begin{array}{r} 10 \\ - 7 \\ \hline \end{array}$$

$$\begin{array}{r} 11 \\ - 8 \\ \hline \end{array}$$

$$\begin{array}{r} 12 \\ - 5 \\ \hline \end{array}$$

$$\begin{array}{r} 9 \\ - 2 \\ \hline \end{array}$$

$$\begin{array}{r} 12 \\ - 7 \\ \hline \end{array}$$

$$\begin{array}{r} 10 \\ - 3 \\ \hline \end{array}$$

$$\begin{array}{r} 12 \\ - 9 \\ \hline \end{array}$$

$$\begin{array}{r} 7 \\ - 3 \\ \hline \end{array}$$

$$\begin{array}{r} 11 \\ - 9 \\ \hline \end{array}$$

$$\begin{array}{r} 10 \\ - 5 \\ \hline \end{array}$$

$$\begin{array}{r} 11 \\ - 4 \\ \hline \end{array}$$

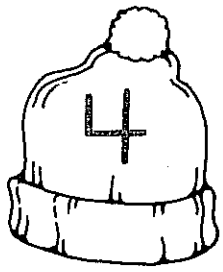
$$\begin{array}{r} 8 \\ - 8 \\ \hline \end{array}$$

$$\begin{array}{r} 12 \\ - 3 \\ \hline \end{array}$$

$$\begin{array}{r} 10 \\ - 1 \\ \hline \end{array}$$

$$\begin{array}{r} 11 \\ - 2 \\ \hline \end{array}$$

Mark the problem that does not belong.



$$\begin{array}{r} 7 \\ -3 \\ \hline 4 \end{array}$$

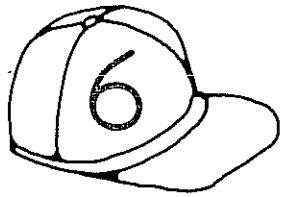
$$\begin{array}{r} 9 \\ -5 \\ \hline \end{array}$$

$$\begin{array}{r} 10 \\ -6 \\ \hline \end{array}$$

~~$$\begin{array}{r} 12 \\ -7 \\ \hline 5 \end{array}$$~~

$$\begin{array}{r} 11 \\ -7 \\ \hline \end{array}$$

$$\begin{array}{r} 8 \\ -4 \\ \hline \end{array}$$



$$\begin{array}{r} 9 \\ -3 \\ \hline \end{array}$$

$$\begin{array}{r} 11 \\ -5 \\ \hline \end{array}$$

$$\begin{array}{r} 10 \\ -3 \\ \hline \end{array}$$

$$\begin{array}{r} 8 \\ -2 \\ \hline \end{array}$$

$$\begin{array}{r} 7 \\ -1 \\ \hline \end{array}$$

$$\begin{array}{r} 12 \\ -6 \\ \hline \end{array}$$



$$\begin{array}{r} 10 \\ -5 \\ \hline \end{array}$$

$$\begin{array}{r} 9 \\ -4 \\ \hline \end{array}$$

$$\begin{array}{r} 12 \\ -7 \\ \hline \end{array}$$

$$\begin{array}{r} 8 \\ -3 \\ \hline \end{array}$$

$$\begin{array}{r} 11 \\ -7 \\ \hline \end{array}$$

$$\begin{array}{r} 7 \\ -2 \\ \hline \end{array}$$



$$\begin{array}{r} 11 \\ -4 \\ \hline \end{array}$$


$$\begin{array}{r} 7 \\ -0 \\ \hline \end{array}$$

$$\begin{array}{r} 12 \\ -5 \\ \hline \end{array}$$

$$\begin{array}{r} 10 \\ -2 \\ \hline \end{array}$$

$$\begin{array}{r} 9 \\ -2 \\ \hline \end{array}$$

$$\begin{array}{r} 8 \\ -1 \\ \hline \end{array}$$



$$\begin{array}{r} 9 \\ -1 \\ \hline \end{array}$$

$$\begin{array}{r} 12 \\ -4 \\ \hline \end{array}$$

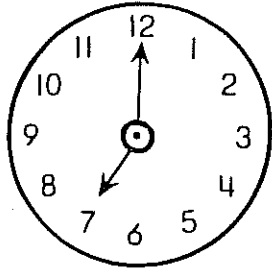
$$\begin{array}{r} 10 \\ -2 \\ \hline \end{array}$$

$$\begin{array}{r} 11 \\ -3 \\ \hline \end{array}$$

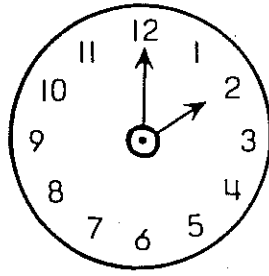
$$\begin{array}{r} 8 \\ -0 \\ \hline \end{array}$$

$$\begin{array}{r} 12 \\ -5 \\ \hline \end{array}$$

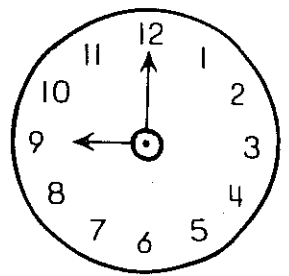
Give the times.



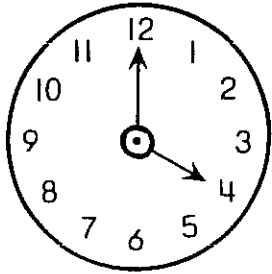
7:00



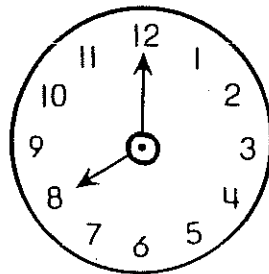
\_\_\_\_\_



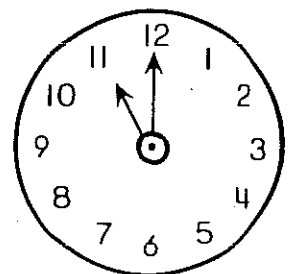
\_\_\_\_\_



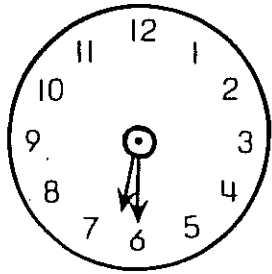
\_\_\_\_\_



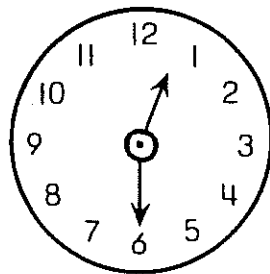
\_\_\_\_\_



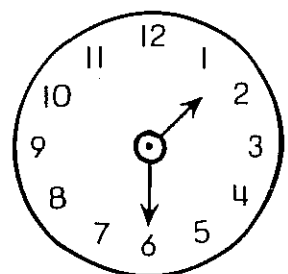
\_\_\_\_\_



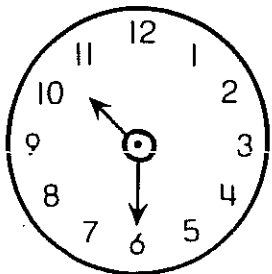
6:30



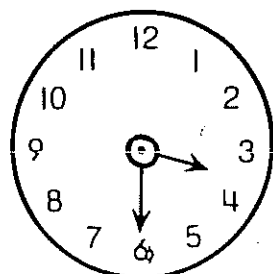
\_\_\_\_\_



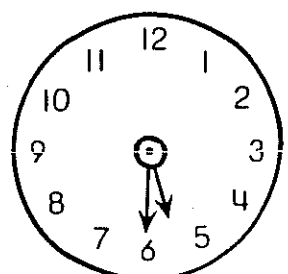
\_\_\_\_\_



\_\_\_\_\_

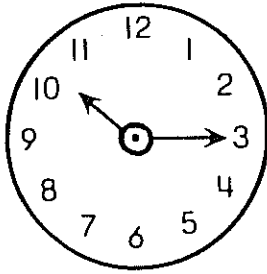


\_\_\_\_\_

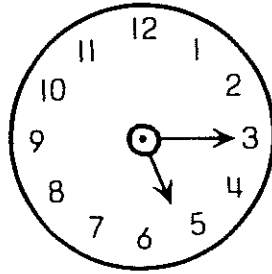


\_\_\_\_\_

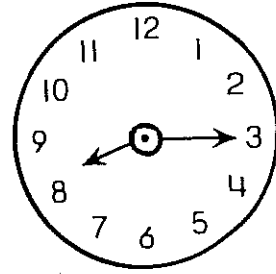
Give the times.



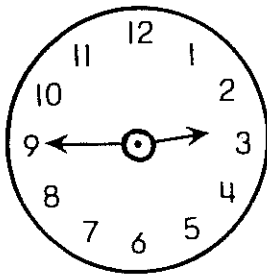
10:15



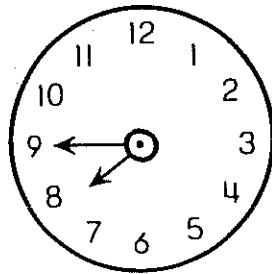
\_\_\_\_\_



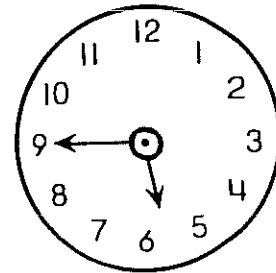
\_\_\_\_\_



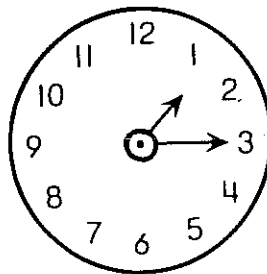
2:45



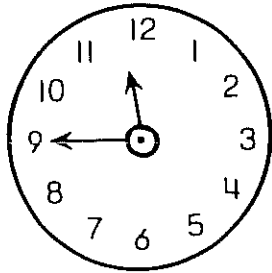
\_\_\_\_\_



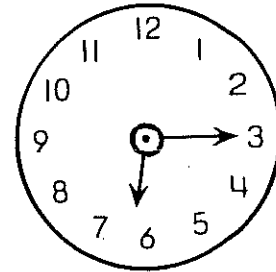
\_\_\_\_\_



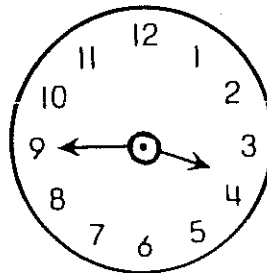
\_\_\_\_\_



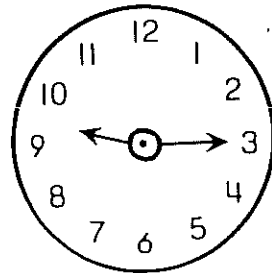
\_\_\_\_\_



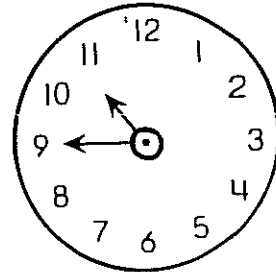
\_\_\_\_\_





\_\_\_\_\_



\_\_\_\_\_



\_\_\_\_\_

$$\begin{array}{r} 8 \\ + 5 \\ \hline 13 \end{array}$$

Add.

$$\begin{array}{r} 8 \\ + 3 \\ \hline \end{array}$$

$$\begin{array}{r} 9 \\ + 5 \\ \hline \end{array}$$

$$\begin{array}{r} 5 \\ + 7 \\ \hline \end{array}$$

$$\begin{array}{r} 7 \\ + 7 \\ \hline \end{array}$$

$$\begin{array}{r} 5 \\ + 6 \\ \hline \end{array}$$

$$\begin{array}{r} 6 \\ + 7 \\ \hline \end{array}$$

$$\begin{array}{r} 4 \\ + 9 \\ \hline \end{array}$$

$$\begin{array}{r} 6 \\ + 8 \\ \hline \end{array}$$

$$\begin{array}{r} 6 \\ + 7 \\ \hline \end{array}$$

$$\begin{array}{r} 6 \\ + 6 \\ \hline \end{array}$$

$$\begin{array}{r} 9 \\ + 4 \\ \hline \end{array}$$

$$\begin{array}{r} 5 \\ + 9 \\ \hline \end{array}$$

$$\begin{array}{r} 7 \\ + 6 \\ \hline \end{array}$$

$$\begin{array}{r} 9 \\ + 5 \\ \hline \end{array}$$

$$\begin{array}{r} 8 \\ + 5 \\ \hline \end{array}$$

$$\begin{array}{r} 2 \\ + 8 \\ \hline \end{array}$$

$$\begin{array}{r} 5 \\ + 8 \\ \hline \end{array}$$

$$\begin{array}{r} 8 \\ + 6 \\ \hline \end{array}$$

$$\begin{array}{r} 7 \\ + 4 \\ \hline \end{array}$$

$$\begin{array}{r} 7 \\ + 7 \\ \hline \end{array}$$

$$\begin{array}{r} 5 \\ + 8 \\ \hline \end{array}$$

$$\begin{array}{r} 8 \\ + 4 \\ \hline \end{array}$$

$$\begin{array}{r} 5 \\ + 9 \\ \hline \end{array}$$

$$\begin{array}{r} 7 \\ + 6 \\ \hline \end{array}$$

$$\begin{array}{r} 6 \\ + 4 \\ \hline \end{array}$$

$$\begin{array}{r} 9 \\ + 4 \\ \hline \end{array}$$

$$\begin{array}{r} 6 \\ + 8 \\ \hline \end{array}$$

$$\begin{array}{r} 3 \\ + 9 \\ \hline \end{array}$$

$$\begin{array}{r} 4 \\ + 9 \\ \hline \end{array}$$

$$\begin{array}{r} 8 \\ + 6 \\ \hline \end{array}$$

Solve.

1. 8 blue birds were on the wire. 6 red birds were on the same wire. How many birds were on the wire? \_\_\_\_\_

2. Ben picked 12 flowers. Carla picked 9 flowers. How many more flowers did Ben pick than Carla? \_\_\_\_\_

3. 5 bugs were on a leaf. 8 more bugs came to the leaf. How many bugs were there in all? \_\_\_\_\_

4. 17 children went swimming. 9 children played kick ball. How many more went swimming? \_\_\_\_\_

5. Marie had 7 large fish hooks. She also had 8 small fish hooks. How many fish hooks did she have in all? \_\_\_\_\_

6. 11 bees were on the pear. 6 of them flew away. How many were still on the pear? \_\_\_\_\_

















7. Tim caught 7 fish. Jean caught 14 fish. How many more fish did Jean catch than Tim? \_\_\_\_\_

8. The children planted 15 trees in January and 6 trees in February. How many more trees did they plant in January? \_\_\_\_\_

Name \_\_\_\_\_

To follow text page 154

Which roll has more tickets? Ring it.



Add the ones  
and regroup

Then add  
the tens

$$\begin{array}{r} \overset{1}{38} \\ + 24 \\ \hline 62 \end{array}$$

$$\begin{array}{r} \overset{1}{38} \\ + 24 \\ \hline 62 \end{array}$$

Sometimes  
you regroup

$$\begin{array}{r} \overset{1}{36} \\ + 57 \\ \hline 93 \end{array}$$

Sometimes you  
do not regroup

$$\begin{array}{r} 32 \\ + 53 \\ \hline 85 \end{array}$$

Add.

$$\begin{array}{r} 47 \\ + 29 \\ \hline \end{array}$$

$$\begin{array}{r} 42 \\ + 36 \\ \hline \end{array}$$

$$\begin{array}{r} 16 \\ + 25 \\ \hline \end{array}$$

$$\begin{array}{r} 51 \\ + 24 \\ \hline \end{array}$$

$$\begin{array}{r} 34 \\ + 36 \\ \hline \end{array}$$

$$\begin{array}{r} 57 \\ + 8 \\ \hline \end{array}$$

$$\begin{array}{r} 48 \\ + 37 \\ \hline \end{array}$$

$$\begin{array}{r} 62 \\ + 17 \\ \hline \end{array}$$

$$\begin{array}{r} 14 \\ + 49 \\ \hline \end{array}$$

$$\begin{array}{r} 36 \\ + 29 \\ \hline \end{array}$$

$$\begin{array}{r} 29 \\ + 19 \\ \hline \end{array}$$

$$\begin{array}{r} 65 \\ + 9 \\ \hline \end{array}$$

$$\begin{array}{r} 24 \\ + 59 \\ \hline \end{array}$$

$$\begin{array}{r} 46 \\ + 22 \\ \hline \end{array}$$

$$\begin{array}{r} 18 \\ + 48 \\ \hline \end{array}$$

$$\begin{array}{r} 46 \\ + 47 \\ \hline \end{array}$$

$$\begin{array}{r} 30 \\ + 17 \\ \hline \end{array}$$

$$\begin{array}{r} 38 \\ + 29 \\ \hline \end{array}$$


$$\begin{array}{r} 42 \\ + 6 \\ \hline \end{array}$$

$$\begin{array}{r} 53 \\ + 27 \\ \hline \end{array}$$


# Count the money.



\_\_\_\_\_ ¢



\_\_\_\_\_ ¢



\_\_\_\_\_ ¢



\_\_\_\_\_ ¢

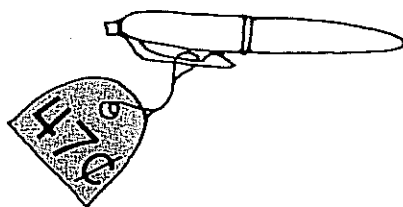

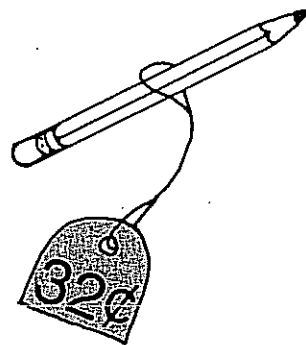



\_\_\_\_\_ ¢

Name \_\_\_\_\_













To follow text page 204

Match.















Write two addition and two subtraction problems.













6      7  
13

			
+	+	-	-
			
-----	-----	-----	-----
			













7      9  
16

			
+	+	-	-
			
-----	-----	-----	-----
			

9      6  
15

			
+	+	-	-
			
-----	-----	-----	-----
			

8      4  
12

			
+	+	-	-
			
-----	-----	-----	-----
			

Name \_\_\_\_\_

Sometimes you  
need more ones

$$\begin{array}{r} 54 \\ -16 \\ \hline ? \end{array} \longrightarrow \begin{array}{r} \overset{4}{\cancel{5}}\overset{14}{\cancel{4}} \\ -16 \\ \hline 38 \end{array}$$

Sometimes you do  
not need more ones

$$\begin{array}{r} 67 \\ -24 \\ \hline 43 \end{array}$$

Subtract.

$$\begin{array}{r} 55 \\ -38 \\ \hline \end{array}$$

$$\begin{array}{r} 78 \\ -35 \\ \hline \end{array}$$

$$\begin{array}{r} 42 \\ -17 \\ \hline \end{array}$$

$$\begin{array}{r} 96 \\ -14 \\ \hline \end{array}$$

$$\begin{array}{r} 76 \\ -37 \\ \hline \end{array}$$

$$\begin{array}{r} 48 \\ -5 \\ \hline \end{array}$$

$$\begin{array}{r} 28 \\ -19 \\ \hline \end{array}$$

$$\begin{array}{r} 85 \\ -32 \\ \hline \end{array}$$

$$\begin{array}{r} 75 \\ -9 \\ \hline \end{array}$$

$$\begin{array}{r} 43 \\ -21 \\ \hline \end{array}$$

$$\begin{array}{r} 64 \\ -58 \\ \hline \end{array}$$

$$\begin{array}{r} 69 \\ -64 \\ \hline \end{array}$$

$$\begin{array}{r} 62 \\ -19 \\ \hline \end{array}$$

$$\begin{array}{r} 57 \\ -3 \\ \hline \end{array}$$


$$\begin{array}{r} 47 \\ -8 \\ \hline \end{array}$$

Solve.

1. Mr. Berg has 29 children in his class. Ms. Lee has 34 children in her class. How many more children are there in Ms. Lee's class? \_\_\_\_\_
2. Hans read for 50 minutes. Then he watched television for 35 minutes. How many more minutes did he read? \_\_\_\_\_
3. Maria sold 27 tickets. Juan sold 26 tickets. How many tickets is this altogether? \_\_\_\_\_
4. Inez has 54 marbles. Joe has 47 marbles. How many more marbles does Inez have? \_\_\_\_\_
5. Scott had 35 cents. He earned 45 cents for baby-sitting. How much does he have now? \_\_\_\_\_ ¢
6. Joy has 59 cents. She wants to buy a game that costs 75 cents. How much more money does she need? \_\_\_\_\_ ¢


Solve.

There are 4 clowns.  
Each clown is wearing 3 hats.  
How many hats is this altogether?




\_\_\_\_\_

There are 2 elephants.  
3 clowns are riding each elephant.  
How many clowns is this?




\_\_\_\_\_

There are 3 rings at the circus.  
2 horses are in each ring.  
How many horses is this in all?



\_\_\_\_\_

There are three wagons.  
3 circus dogs are riding in each wagon.  
How many dogs are riding in the wagons?



\_\_\_\_\_


## Circus Cards



two cents



three cents



four cents



five cents

Give the total cost for each.

3 two-cent cards cost 6 ¢

4 four-cent cards cost 16 ¢

3 five-cent cards cost \_\_\_\_\_ ¢

3 three-cent cards cost \_\_\_\_\_ ¢

5 two-cent cards cost \_\_\_\_\_ ¢

3 four-cent cards cost \_\_\_\_\_ ¢

5 four-cent cards cost \_\_\_\_\_ ¢

4 three-cent cards cost \_\_\_\_\_ ¢

4 five-cent cards cost \_\_\_\_\_ ¢

2 two-cent cards cost \_\_\_\_\_ ¢

3 three-cent cards cost \_\_\_\_\_ ¢

4 four-cent cards cost \_\_\_\_\_ ¢


4 two-cent cards cost \_\_\_\_\_ ¢

5 three-cent cards cost \_\_\_\_\_ ¢

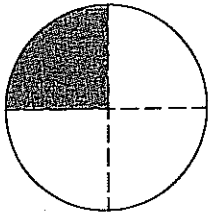
Ring the fraction for the colored part of each region.



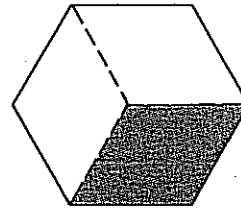
- $\frac{1}{2}$     $\frac{1}{3}$     $\frac{1}{4}$     $\frac{2}{3}$     $\frac{3}{4}$



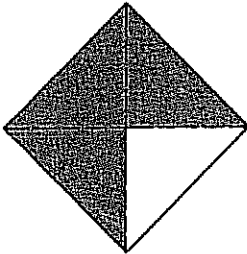
- $\frac{1}{2}$     $\frac{1}{3}$     $\frac{2}{2}$     $\frac{2}{3}$     $\frac{3}{3}$



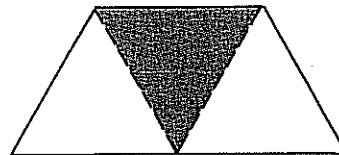
- $\frac{1}{2}$     $\frac{1}{3}$     $\frac{1}{4}$     $\frac{2}{3}$     $\frac{3}{4}$



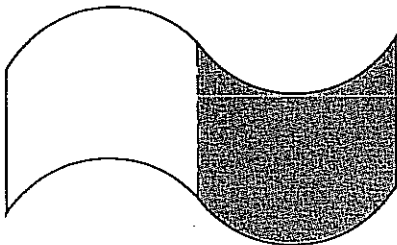
- $\frac{1}{2}$     $\frac{1}{3}$     $\frac{1}{4}$     $\frac{2}{3}$     $\frac{3}{3}$




- $\frac{1}{4}$     $\frac{2}{4}$     $\frac{3}{4}$     $\frac{4}{4}$     $\frac{1}{3}$



- $\frac{1}{2}$     $\frac{1}{3}$     $\frac{1}{4}$     $\frac{2}{3}$     $\frac{3}{4}$




- $\frac{1}{2}$     $\frac{1}{3}$     $\frac{2}{3}$     $\frac{3}{4}$     $\frac{3}{3}$



- $\frac{1}{2}$     $\frac{1}{3}$     $\frac{2}{3}$     $\frac{3}{4}$     $\frac{4}{4}$

**Problem Solving: Using Math Sense**

Look at the picture. You may use coins to solve each problem.



**1** Seth has 50¢. He orders popcorn and juice. Does he have enough money?

\_\_\_\_\_

Does he get any change?

\_\_\_\_\_

**2** Mary has \$1.00. She buys a popcorn and a fruit bar. Can she buy anything else?

\_\_\_\_\_

What else can she buy?

\_\_\_\_\_

You may use a clock to solve each problem.

**3** Ken wakes up at 7:00. He gets ready for school. He leaves at 7:45. How much time does Ken spend getting ready?

\_\_\_\_\_

**4** Lunch at school starts at 12:15. It is over at 1:00. How long is lunch?

\_\_\_\_\_

**Patterns in Addition**

Mark and Ruth are making paper flowers for the school fair. The table shows how many flowers they made in one week.

**Paper Flowers**

	Sunday	Monday	Tuesday	Wednesday	Thursday	Friday	Saturday
Mark	17	22	27	32	37	42	
Ruth	11	16	21	26	31	36	
Total	28						

**Complete the table.**

**Look for a pattern in the table.**

**Use the table to solve each problem.**

- 1** What was the total number of flowers made by Tuesday? \_\_\_\_\_
- 2** What was the total number of flowers made by Friday? \_\_\_\_\_
- 3** How many flowers did Ruth make by Saturday? \_\_\_\_\_
- 4** Who made more flowers that week? \_\_\_\_\_
- 5** What was the total number of flowers made that week? \_\_\_\_\_
- 6** Write about the patterns you found. \_\_\_\_\_

# ENRICHMENT

for pages 227–228

## Subtracting Tens


Start with the number on each flag.  
Add or subtract. Write the number.



10 more \_\_\_\_\_  
 10 more \_\_\_\_\_  
 10 more \_\_\_\_\_  
 10 less \_\_\_\_\_  
 10 less \_\_\_\_\_




10 less \_\_\_\_\_  
 10 less \_\_\_\_\_  
 10 less \_\_\_\_\_  
 10 less \_\_\_\_\_  
 10 more \_\_\_\_\_



10 less \_\_\_\_\_  
 10 less \_\_\_\_\_  
 10 more \_\_\_\_\_  
 10 more \_\_\_\_\_  
 10 less \_\_\_\_\_



10 more \_\_\_\_\_  
 10 more \_\_\_\_\_  
 10 more \_\_\_\_\_  
 10 more \_\_\_\_\_  
 10 less \_\_\_\_\_




10 more \_\_\_\_\_  
 10 less \_\_\_\_\_  
 10 less \_\_\_\_\_  
 10 less \_\_\_\_\_  
 10 less \_\_\_\_\_



10 more \_\_\_\_\_  
 10 more \_\_\_\_\_  
 10 more \_\_\_\_\_  
 10 more \_\_\_\_\_  
 10 less \_\_\_\_\_

**Addition and Subtraction**

Solve the addition and subtraction puzzle.

**Across**

**1**  $73 - 47 = \underline{\quad}$

**3**  $68 + 14 = \underline{\quad}$

**5**  $90 - 9 = \underline{\quad}$

**6**  $36 + 5 = \underline{\quad}$

**9**  $48 + 7 = \underline{\quad}$

**10**  $59 - 16 = \underline{\quad}$

**13**  $62 - 3 = \underline{\quad}$

**15**  $61 - 1 = \underline{\quad}$

**Down**

**2**  $34 + 34 = \underline{\quad}$

**4**  $40 - 19 = \underline{\quad}$

**7**  $33 - 8 = \underline{\quad}$

**8**  $33 + 11 = \underline{\quad}$

**11**  $21 + 14 = \underline{\quad}$


**12**  $82 - 12 = \underline{\quad}$

**14**  $70 + 20 = \underline{\quad}$

**Chapter 8 ENRICHMENT**


for pages 247–248

**Using Tables and Graphs**



Betsy used a bar graph to show how many books her friends collected for the library.

Find out how many books each friend collected. Then use the information to answer the questions.



Total books

\_\_\_\_\_

\_\_\_\_\_

\_\_\_\_\_

\_\_\_\_\_

- 1** How many books did Jenny and Max collect together? \_\_\_\_\_
- 2** How many more books did Mandy collect than Jessie? \_\_\_\_\_
- 3** How many books did Max and Mandy collect? \_\_\_\_\_
- 4** Estimate how many books they collected in all.

**Loop your answer.**

30

70

150